

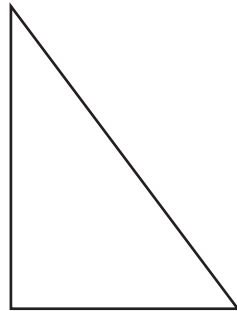

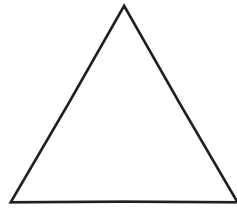



依照指示做做看。

把邊長2公分的正方形塗上紅色。

把邊長3公分的正三角形塗上藍色。

把寬邊長1公分的長方形圈出來。



動動腦。

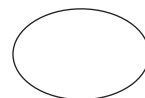
誰畫的形狀？

- 小可畫的圖形有0個邊和0個角。
- 東東畫的圖形不是橢圓。
- 毛毛畫的圖形有四個角。

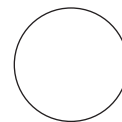
右邊三個圖形到底是誰畫的？請你填出他們的名字。



正方形



橢圓形

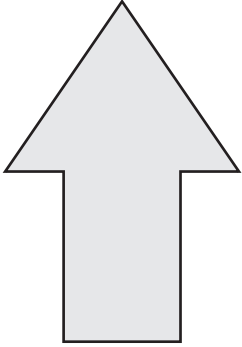


圓形



下圖中，沒有平行現象的打×。


1



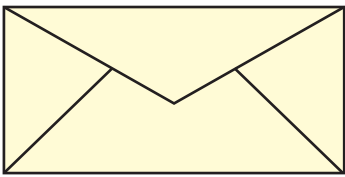
2




3



4



5



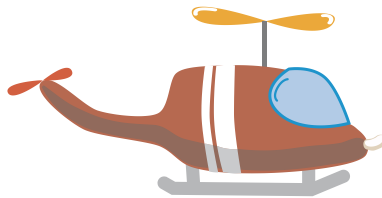
6




7



8




9






下面的圖卡中，比大的打✓，比小的畫○。

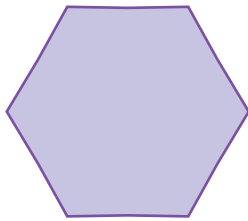
1




2




3




4



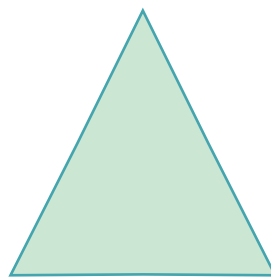
5



6



7



8

